



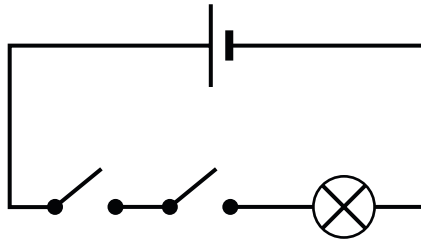
Name: Form:

Based on pages 6 and 7 of *Changing circuits*

What do the switches do?

Try this...

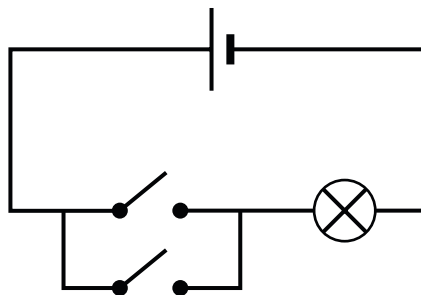
1. Set up this circuit.



2. What must you do to make the bulb light?



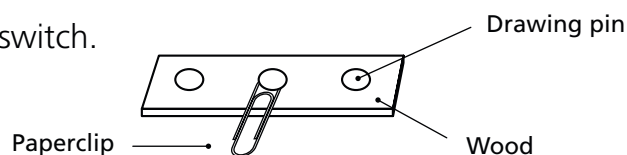
3. Set up this circuit.



4. What must you do to make the bulb light?



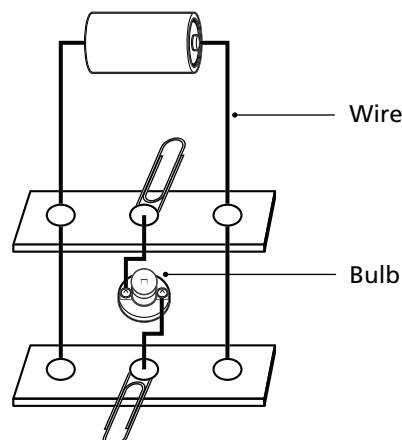
5. Make this two-way switch.



6. Make a second two-way switch.

7. Set up this circuit with your two two-way switches.

8. How must you arrange the switches for the bulb to light?



9. Where in the home could you find two-way switches?

