




Name: Form:


See pages 18 and 19 of *Microbes*

Microbes and disease

Since ancient times, microbes have caused widespread disease.




Q1. Add words and an arrow to the diagram to explain how person B may receive a disease from person A.

(ii) Name a disease which is spread as shown in the diagram. 

Q2. When do most diseases occur?



Q3. (i) What disease is spread by fleas? 

(ii) How does the disease get from fleas to humans?








Q4. (i) What kind of microbe caused the potato famine? 

(ii) In which country did the worst potato famine occur? 

Q5. (i) What kind of microbe causes malaria? 

(ii) What animal spreads malaria? 

Q6. How does the use of handkerchiefs stop the spread of disease?



