

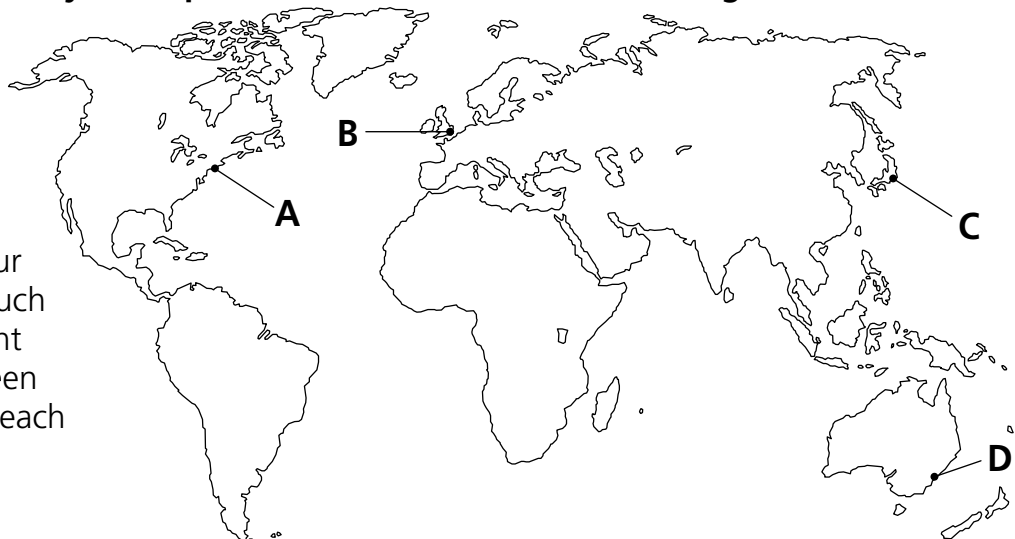


Name: Form:

See pages 8 and 9 of *Light and shadows*


Outdoor lighting

We can only light very small parts of the world around us at night.




Q1. A to D are four cities which have such bright lights at night that they can be seen from space. Name each one and say which country it is in.

A 

B 

C 

D 

Q2. What is a major source of natural light at night? 

Q3. Where may you find the most powerful outdoor lights?



Q4. Why do cars have their own lights?



Q5. Why are street lights not very bright?



Q6. (i) How could you find out how much light we make on Earth at night?



(ii) What would you see?





